

S

ummer

B

rain

F

ood

Berry Creative



2nd



MONDAY Write 2 words
that rhyme.

goal
1. _____
2. _____

COW
1. _____
2. _____

boy
1. _____
2. _____

look
1. _____
2. _____

TUESDAY Take the two
words and
make them into
a contraction.

can not


he is

was not

did not

we are

what is



Wednesday

Complete the equation with a $<$, $>$, or $=$ to make it correct.

$$21 \bigcirc 41$$

$$12 \bigcirc 5$$

$$103 \bigcirc 53$$

$$134 \bigcirc 321$$

$$833 \bigcirc 833$$

$$13 \bigcirc 213$$

$$320 \bigcirc 152$$

$$52 \bigcirc 75$$

$$121 \bigcirc 121$$

$$23 \bigcirc 230$$

$$24 \bigcirc 4$$

$$41 \bigcirc 63$$

Thursday

Have an adult time you for 3 minutes!

$$\begin{array}{r} 0 \\ +1 \\ \hline \end{array}$$

$$\begin{array}{r} 1 \\ +4 \\ \hline \end{array}$$

$$\begin{array}{r} 2 \\ +8 \\ \hline \end{array}$$

$$\begin{array}{r} 4 \\ +3 \\ \hline \end{array}$$

$$\begin{array}{r} 6 \\ +1 \\ \hline \end{array}$$

$$\begin{array}{r} 5 \\ +9 \\ \hline \end{array}$$

$$\begin{array}{r} 8 \\ +0 \\ \hline \end{array}$$

$$\begin{array}{r} 9 \\ +7 \\ \hline \end{array}$$

$$\begin{array}{r} 3 \\ +2 \\ \hline \end{array}$$

$$\begin{array}{r} 4 \\ +6 \\ \hline \end{array}$$

$$\begin{array}{r} 2 \\ +5 \\ \hline \end{array}$$

$$\begin{array}{r} 0 \\ +7 \\ \hline \end{array}$$

$$\begin{array}{r} 3 \\ +9 \\ \hline \end{array}$$

$$\begin{array}{r} 0 \\ +4 \\ \hline \end{array}$$

$$\begin{array}{r} 2 \\ +2 \\ \hline \end{array}$$

$$\begin{array}{r} 6 \\ +7 \\ \hline \end{array}$$

$$\begin{array}{r} 9 \\ +2 \\ \hline \end{array}$$

$$\begin{array}{r} 1 \\ +7 \\ \hline \end{array}$$

$$\begin{array}{r} 4 \\ +0 \\ \hline \end{array}$$

$$\begin{array}{r} 7 \\ +3 \\ \hline \end{array}$$

$$\begin{array}{r} 9 \\ +9 \\ \hline \end{array}$$

$$\begin{array}{r} 5 \\ +2 \\ \hline \end{array}$$

$$\begin{array}{r} 1 \\ +2 \\ \hline \end{array}$$

$$\begin{array}{r} 0 \\ +9 \\ \hline \end{array}$$

$$\begin{array}{r} 4 \\ +2 \\ \hline \end{array}$$

$$\begin{array}{r} 8 \\ +7 \\ \hline \end{array}$$

$$\begin{array}{r} 5 \\ +3 \\ \hline \end{array}$$

$$\begin{array}{r} 3 \\ +8 \\ \hline \end{array}$$

$$\begin{array}{r} 0 \\ +5 \\ \hline \end{array}$$

$$\begin{array}{r} 3 \\ +4 \\ \hline \end{array}$$

$$\begin{array}{r} 7 \\ +8 \\ \hline \end{array}$$

$$\begin{array}{r} 8 \\ +5 \\ \hline \end{array}$$

$$\begin{array}{r} 5 \\ +1 \\ \hline \end{array}$$

$$\begin{array}{r} 2 \\ +4 \\ \hline \end{array}$$

$$\begin{array}{r} 4 \\ +9 \\ \hline \end{array}$$

$$\begin{array}{r} 0 \\ +2 \\ \hline \end{array}$$

$$\begin{array}{r} 9 \\ +5 \\ \hline \end{array}$$

$$\begin{array}{r} 6 \\ +2 \\ \hline \end{array}$$

$$\begin{array}{r} 5 \\ +7 \\ \hline \end{array}$$

$$\begin{array}{r} 2 \\ +9 \\ \hline \end{array}$$

Friday

Read a book!
Answer the
questions.




Who were the main characters in the book?

Where did the story take place?

What was your favorite part of the book?

More

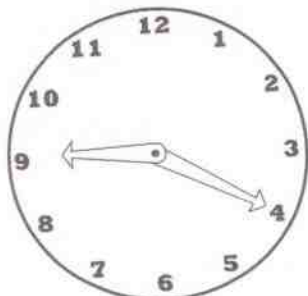
Write the digital
time to match
the analog
time.



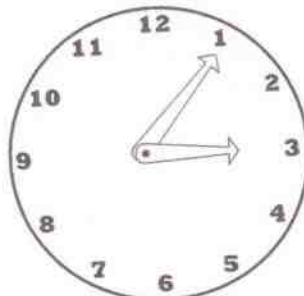
____ : ____



____ : ____



____ : ____



____ : ____



____ : ____

TUESDAY

Sort the words
into the correct
column.

like but
can sheep
beat hand
keep us
ship mail
not make

long vowel words

short vowel words

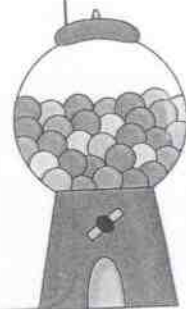
Wednesday

Solve the story
problem.

Jennifer had 4 gum balls. She ate 2 of her gum balls. Then her mom gave her 5 more gum balls. How many gum balls does Jennifer have now?

Show your work here:

Answer: _____



Berry Creative ©

THURSDAY

Edit the
sentence and
rewrite on the
line.

can wi go too the prk to paly toda

i lik two go swimming

FRIDAY

Match a word from
column A with a
word from column
B to make a
compound word.

A

cup

rain

base

pop

butter

foot

B

ball

bow


corn

print

fly

cake

Berry Creative ©



MONDAY Put the words
in ABC order.

sleep

next

please

jump

little

she

1. _____

2. _____

3. _____

4. _____

5. _____

6. _____

TUESDAY

Read a non-fiction
book. Write a
sentence about
the beginning,
middle, and end.

Wednesday

Complete the number pattern.

A	24	26	28					
---	----	----	----	--	--	--	--	--

B	170	180	190					
---	-----	-----	-----	--	--	--	--	--

C	65	70	75					
---	----	----	----	--	--	--	--	--

D	124	134	154					
---	-----	-----	-----	--	--	--	--	--

Thursday

Math Facts!
Have an adult
time you for 3
minutes!

$\begin{array}{r} 9 \\ -9 \\ \hline \end{array}$	$\begin{array}{r} 5 \\ -1 \\ \hline \end{array}$	$\begin{array}{r} 3 \\ -2 \\ \hline \end{array}$	$\begin{array}{r} 9 \\ -6 \\ \hline \end{array}$	$\begin{array}{r} 6 \\ -4 \\ \hline \end{array}$	$\begin{array}{r} 8 \\ -4 \\ \hline \end{array}$	$\begin{array}{r} 4 \\ -0 \\ \hline \end{array}$	$\begin{array}{r} 9 \\ -4 \\ \hline \end{array}$	$\begin{array}{r} 8 \\ -7 \\ \hline \end{array}$	$\begin{array}{r} 7 \\ -7 \\ \hline \end{array}$
--	--	--	--	--	--	--	--	--	--

$\begin{array}{r} 4 \\ -3 \\ \hline \end{array}$	$\begin{array}{r} 5 \\ -3 \\ \hline \end{array}$	$\begin{array}{r} 8 \\ -5 \\ \hline \end{array}$	$\begin{array}{r} 9 \\ -3 \\ \hline \end{array}$	$\begin{array}{r} 5 \\ -5 \\ \hline \end{array}$	$\begin{array}{r} 7 \\ -3 \\ \hline \end{array}$	$\begin{array}{r} 3 \\ -1 \\ \hline \end{array}$	$\begin{array}{r} 3 \\ -3 \\ \hline \end{array}$	$\begin{array}{r} 7 \\ -2 \\ \hline \end{array}$	$\begin{array}{r} 9 \\ -0 \\ \hline \end{array}$
--	--	--	--	--	--	--	--	--	--

$\begin{array}{r} 8 \\ -0 \\ \hline \end{array}$	$\begin{array}{r} 7 \\ -6 \\ \hline \end{array}$	$\begin{array}{r} 8 \\ -1 \\ \hline \end{array}$	$\begin{array}{r} 7 \\ -0 \\ \hline \end{array}$	$\begin{array}{r} 5 \\ -2 \\ \hline \end{array}$	$\begin{array}{r} 2 \\ -2 \\ \hline \end{array}$	$\begin{array}{r} 1 \\ -0 \\ \hline \end{array}$	$\begin{array}{r} 6 \\ -2 \\ \hline \end{array}$	$\begin{array}{r} 7 \\ -0 \\ \hline \end{array}$	$\begin{array}{r} 6 \\ -1 \\ \hline \end{array}$
--	--	--	--	--	--	--	--	--	--

$\begin{array}{r} 9 \\ -5 \\ \hline \end{array}$	$\begin{array}{r} 5 \\ -1 \\ \hline \end{array}$	$\begin{array}{r} 5 \\ -0 \\ \hline \end{array}$	$\begin{array}{r} 9 \\ -6 \\ \hline \end{array}$	$\begin{array}{r} 2 \\ -1 \\ \hline \end{array}$	$\begin{array}{r} 8 \\ -4 \\ \hline \end{array}$	$\begin{array}{r} 0 \\ -0 \\ \hline \end{array}$	$\begin{array}{r} 9 \\ -4 \\ \hline \end{array}$	$\begin{array}{r} 9 \\ -1 \\ \hline \end{array}$	$\begin{array}{r} 7 \\ -7 \\ \hline \end{array}$
--	--	--	--	--	--	--	--	--	--

Friday

Complete the graph using the information in the table.

1. How many students picked orange? _____
2. How many more students picked cherry than apple?

3. Which flavor was picked the most? _____
4. How many students picked grape and bubble gum?

Favorite Gum Ball Flavors	
orange	○
cherry	○ ○ ○ ○ ○ ○
grape	○ ○ ○ ○
apple	○ ○ ○
bubble gum	○ ○ ○ ○ ○
○ = 1 student	

Monday

Sort the words into the correct category.

tree jump swim chair girl shirt fish
doctor school talk book clock run play

Nouns	Verbs

TUESDAY

Complete the
chart with the
using the
number above
it.

678

hundreds	tens	ones

54

hundreds	tens	ones

142

hundreds	tens	ones

180

hundreds	tens	ones

Wednesday

..... Edit the
sentence and
rewrite on the
line.

i wunt to goe to the stor with mom

she call mee yesterday

THURSDAY

Solve the math problems.

$$\begin{array}{r} 23 \\ +10 \\ \hline \end{array}$$

$$\begin{array}{r} 53 \\ +42 \\ \hline \end{array}$$

$$\begin{array}{r} 67 \\ +23 \\ \hline \end{array}$$

$$\begin{array}{r} 80 \\ + 5 \\ \hline \end{array}$$

$$\begin{array}{r} 42 \\ +51 \\ \hline \end{array}$$

$$\begin{array}{r} 66 \\ +70 \\ \hline \end{array}$$

$$\begin{array}{r} 21 \\ +56 \\ \hline \end{array}$$

$$\begin{array}{r} 73 \\ +24 \\ \hline \end{array}$$

$$\begin{array}{r} 90 \\ + 6 \\ \hline \end{array}$$

$$\begin{array}{r} 47 \\ +22 \\ \hline \end{array}$$

FRIDAY

Solve the story problems.

Emily opened her piggy bank. She had 2 dollar bills, 3 quarters, and 4 pennies. How much money did Emily have in her piggy bank?

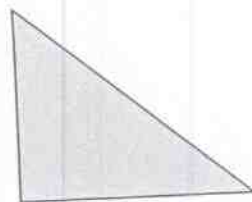


Show your work here:


Answer: _____



MONDAY

Write the name
of each shape
on the line.





TUESDAY

Read the
sentences.
Add the correct
punctuation
where needed.

I went to the store to get apples bananas and grapes

i can t wait to go to disney world in may



Today is tuesday july 2nd 2013

Sally loves to eat at burger king

Wednesday

Math Facts!
Have mom or
dad time you
for 3 minutes!

$$\begin{array}{r} 3 \\ +6 \\ \hline \end{array}$$

$$\begin{array}{r} 1 \\ +3 \\ \hline \end{array}$$

$$\begin{array}{r} 4 \\ +4 \\ \hline \end{array}$$

$$\begin{array}{r} 8 \\ +6 \\ \hline \end{array}$$

$$\begin{array}{r} 5 \\ +6 \\ \hline \end{array}$$

$$\begin{array}{r} 6 \\ +9 \\ \hline \end{array}$$

$$\begin{array}{r} 7 \\ +6 \\ \hline \end{array}$$

$$\begin{array}{r} 3 \\ +3 \\ \hline \end{array}$$

$$\begin{array}{r} 0 \\ +6 \\ \hline \end{array}$$

$$\begin{array}{r} 4 \\ +1 \\ \hline \end{array}$$

$$\begin{array}{r} 1 \\ +9 \\ \hline \end{array}$$

$$\begin{array}{r} 7 \\ +2 \\ \hline \end{array}$$

$$\begin{array}{r} 9 \\ +6 \\ \hline \end{array}$$

$$\begin{array}{r} 2 \\ +1 \\ \hline \end{array}$$

$$\begin{array}{r} 0 \\ +8 \\ \hline \end{array}$$

$$\begin{array}{r} 3 \\ +5 \\ \hline \end{array}$$

$$\begin{array}{r} 8 \\ +2 \\ \hline \end{array}$$

$$\begin{array}{r} 6 \\ +4 \\ \hline \end{array}$$

$$\begin{array}{r} 9 \\ +4 \\ \hline \end{array}$$

$$\begin{array}{r} 5 \\ +8 \\ \hline \end{array}$$

$$\begin{array}{r} 1 \\ +5 \\ \hline \end{array}$$

$$\begin{array}{r} 0 \\ +0 \\ \hline \end{array}$$

$$\begin{array}{r} 2 \\ +7 \\ \hline \end{array}$$

$$\begin{array}{r} 8 \\ +4 \\ \hline \end{array}$$

$$\begin{array}{r} 6 \\ +8 \\ \hline \end{array}$$

$$\begin{array}{r} 1 \\ +0 \\ \hline \end{array}$$

$$\begin{array}{r} 4 \\ +8 \\ \hline \end{array}$$

$$\begin{array}{r} 6 \\ +5 \\ \hline \end{array}$$

$$\begin{array}{r} 8 \\ +1 \\ \hline \end{array}$$

$$\begin{array}{r} 7 \\ +9 \\ \hline \end{array}$$

$$\begin{array}{r} 1 \\ +8 \\ \hline \end{array}$$

$$\begin{array}{r} 2 \\ +0 \\ \hline \end{array}$$

$$\begin{array}{r} 3 \\ +7 \\ \hline \end{array}$$

$$\begin{array}{r} 7 \\ +0 \\ \hline \end{array}$$

$$\begin{array}{r} 8 \\ +9 \\ \hline \end{array}$$

$$\begin{array}{r} 6 \\ +3 \\ \hline \end{array}$$

$$\begin{array}{r} 2 \\ +3 \\ \hline \end{array}$$

$$\begin{array}{r} 6 \\ +0 \\ \hline \end{array}$$

$$\begin{array}{r} 8 \\ +3 \\ \hline \end{array}$$

$$\begin{array}{r} 3 \\ +1 \\ \hline \end{array}$$

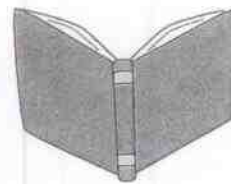
Friday

Write a
paragraph
about your 4th
of July.

My 4th of July

MONDAY

Read a book!
Answer the
questions
about the
book.



What was the title of the book?

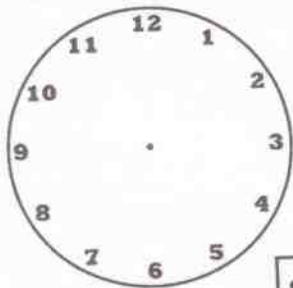
Who was the illustrator of the book?

Who was the author of the book?

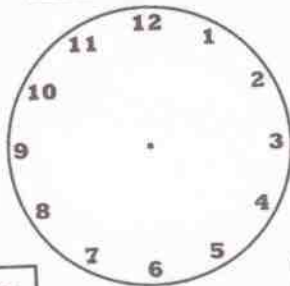
TUESDAY

Fill in the
analog clock
with the
correct time.

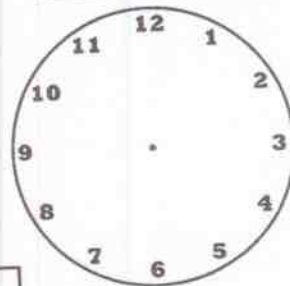
8:15



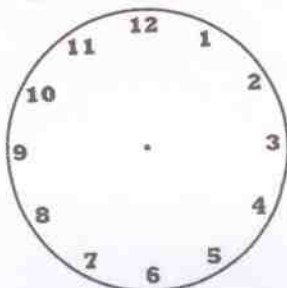
12:30



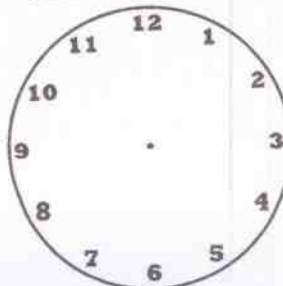
4:25



10:40



6:50



Wednesday

Read the nouns
in the box. Find
5 proper nouns
and write them
on the lines.

cat

pepsi

florida

water

shirt

mcdonald's

denver, colorado

emma

1. _____

2. _____

3. _____

4. _____

5. _____

Thursday

Complete the
equation with a
<, >, or = to
make it correct.

$75 \bigcirc 32$

$9 \bigcirc 59$

$485 \bigcirc 458$

$876 \bigcirc 900$

$430 \bigcirc 436$

$754 \bigcirc 754$

$645 \bigcirc 605$

$56 \bigcirc 65$

$89 \bigcirc 890$

$42 \bigcirc 890$

$23 \bigcirc 23$

$542 \bigcirc 542$

FRIDAY

Solve the story problem.

One day 10 kids were playing baseball. 6 kids had to go home for dinner. Then 8 kids joined the baseball game. How many kids are playing baseball now?

Show your work here:

Answer: _____



MONDAY

Complete the sentence with a word from the box.

1. _____ is a chance of rain today.
2. _____ are you going on vacation?
3. Can they come over to _____ house?
4. Sam went to the store _____ school.
5. There are so _____ flowers in the garden.

there many where after our

TUESDAY

Solve the math problems.

$$\begin{array}{r} 23 \\ 45 \\ +10 \\ \hline \end{array}$$

$$\begin{array}{r} 53 \\ 13 \\ +4 \\ \hline \end{array}$$

$$\begin{array}{r} 32 \\ 61 \\ +8 \\ \hline \end{array}$$

$$\begin{array}{r} 17 \\ 5 \\ +32 \\ \hline \end{array}$$

$$\begin{array}{r} 46 \\ 61 \\ +32 \\ \hline \end{array}$$

$$\begin{array}{r} 98 \\ 11 \\ +8 \\ \hline \end{array}$$

$$\begin{array}{r} 78 \\ 2 \\ +18 \\ \hline \end{array}$$

$$\begin{array}{r} 88 \\ 27 \\ +35 \\ \hline \end{array}$$

$$\begin{array}{r} 6 \\ 19 \\ +20 \\ \hline \end{array}$$

$$\begin{array}{r} 25 \\ 9 \\ +65 \\ \hline \end{array}$$

Wednesday

Put the words in ABC order.

could

would

where

small

new

nice

1. _____

2. _____

3. _____

4. _____

5. _____

6. _____

THURSDAY

Math Facts!
Have an adult
time you for 3
minutes!

$$\begin{array}{r} 9 \\ -7 \\ \hline \end{array} \quad \begin{array}{r} 6 \\ -6 \\ \hline \end{array} \quad \begin{array}{r} 1 \\ -1 \\ \hline \end{array} \quad \begin{array}{r} 3 \\ -0 \\ \hline \end{array} \quad \begin{array}{r} 9 \\ -2 \\ \hline \end{array} \quad \begin{array}{r} 8 \\ -6 \\ \hline \end{array} \quad \begin{array}{r} 5 \\ -4 \\ \hline \end{array} \quad \begin{array}{r} 6 \\ -3 \\ \hline \end{array} \quad \begin{array}{r} 4 \\ -4 \\ \hline \end{array} \quad \begin{array}{r} 9 \\ -8 \\ \hline \end{array}$$

$$\begin{array}{r} 4 \\ -2 \\ \hline \end{array} \quad \begin{array}{r} 2 \\ -0 \\ \hline \end{array} \quad \begin{array}{r} 7 \\ -4 \\ \hline \end{array} \quad \begin{array}{r} 3 \\ -1 \\ \hline \end{array} \quad \begin{array}{r} 9 \\ -6 \\ \hline \end{array} \quad \begin{array}{r} 6 \\ -4 \\ \hline \end{array} \quad \begin{array}{r} 7 \\ -1 \\ \hline \end{array} \quad \begin{array}{r} 9 \\ -9 \\ \hline \end{array} \quad \begin{array}{r} 5 \\ -1 \\ \hline \end{array} \quad \begin{array}{r} 3 \\ -2 \\ \hline \end{array}$$

$$\begin{array}{r} 8 \\ -5 \\ \hline \end{array} \quad \begin{array}{r} 9 \\ -3 \\ \hline \end{array} \quad \begin{array}{r} 4 \\ -3 \\ \hline \end{array} \quad \begin{array}{r} 5 \\ -3 \\ \hline \end{array} \quad \begin{array}{r} 7 \\ -2 \\ \hline \end{array} \quad \begin{array}{r} 9 \\ -0 \\ \hline \end{array} \quad \begin{array}{r} 5 \\ -5 \\ \hline \end{array} \quad \begin{array}{r} 7 \\ -3 \\ \hline \end{array} \quad \begin{array}{r} 3 \\ -1 \\ \hline \end{array} \quad \begin{array}{r} 3 \\ -3 \\ \hline \end{array}$$

$$\begin{array}{r} 8 \\ -1 \\ \hline \end{array} \quad \begin{array}{r} 7 \\ -0 \\ \hline \end{array} \quad \begin{array}{r} 8 \\ -0 \\ \hline \end{array} \quad \begin{array}{r} 7 \\ -6 \\ \hline \end{array} \quad \begin{array}{r} 7 \\ -0 \\ \hline \end{array} \quad \begin{array}{r} 6 \\ -1 \\ \hline \end{array} \quad \begin{array}{r} 5 \\ -2 \\ \hline \end{array} \quad \begin{array}{r} 2 \\ -2 \\ \hline \end{array} \quad \begin{array}{r} 1 \\ -0 \\ \hline \end{array} \quad \begin{array}{r} 6 \\ -2 \\ \hline \end{array}$$

FRIDAY

Write the plural
of each word
listed.



foot

child

man

mouse

tooth

woman

MONDAY

Add the money and write the total on the line.



=



=

TUESDAY

Read a non-fiction book!
Find 2 nouns and 2 verbs in the book.



Book Title:

Nouns:


Verbs:

Wednesday

Use the table to
fill in the
graph.

Name	Pieces of candy
Sally	6
Joe	3
Beth	2
Ann	5
Danny	1

Candy each child ate

Joe	
Sally	
Ann	
Beth	
Danny	
 = 1 piece of candy	

Thursday

Write the 2
words that
make up each
contraction.

can't ~ _____

she's ~ _____

wasn't ~ _____

I'd ~ _____

she'll ~ _____

Friday

Complete the number pattern.



95	100	105					
----	-----	-----	--	--	--	--	--



231	331	431					
-----	-----	-----	--	--	--	--	--





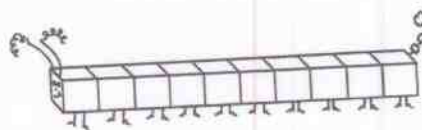
140	142	144					
-----	-----	-----	--	--	--	--	--




115	125	135					
-----	-----	-----	--	--	--	--	--

Monday

Count the base ten blocks and write the number on the line.



=



=

TUESDAY


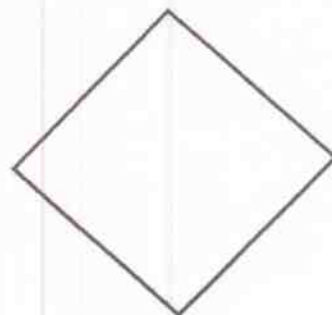


Edit the sentences and rewrite on the lines.

the dogg chased the cat up teh tre

can yuo com ovr

WEDNESDAY

Partition each of the shapes into fourths.



THURSDAY

Math Facts!
Have an adult
time you for 3
minutes!

$$\begin{array}{r} 4 \\ +7 \\ \hline \end{array}$$

$$\begin{array}{r} 8 \\ +8 \\ \hline \end{array}$$

$$\begin{array}{r} 9 \\ +1 \\ \hline \end{array}$$

$$\begin{array}{r} 6 \\ +6 \\ \hline \end{array}$$

$$\begin{array}{r} 9 \\ +8 \\ \hline \end{array}$$

$$\begin{array}{r} 8 \\ +7 \\ \hline \end{array}$$

$$\begin{array}{r} 5 \\ +3 \\ \hline \end{array}$$

$$\begin{array}{r} 3 \\ +8 \\ \hline \end{array}$$

$$\begin{array}{r} 1 \\ +2 \\ \hline \end{array}$$

$$\begin{array}{r} 0 \\ +9 \\ \hline \end{array}$$

$$\begin{array}{r} 1 \\ +0 \\ \hline \end{array}$$

$$\begin{array}{r} 4 \\ +8 \\ \hline \end{array}$$

$$\begin{array}{r} 6 \\ +5 \\ \hline \end{array}$$

$$\begin{array}{r} 2 \\ +7 \\ \hline \end{array}$$

$$\begin{array}{r} 8 \\ +4 \\ \hline \end{array}$$

$$\begin{array}{r} 6 \\ +8 \\ \hline \end{array}$$

$$\begin{array}{r} 8 \\ +1 \\ \hline \end{array}$$

$$\begin{array}{r} 7 \\ +9 \\ \hline \end{array}$$

$$\begin{array}{r} 1 \\ +5 \\ \hline \end{array}$$

$$\begin{array}{r} 0 \\ +0 \\ \hline \end{array}$$

$$\begin{array}{r} 6 \\ +3 \\ \hline \end{array}$$

$$\begin{array}{r} 2 \\ +3 \\ \hline \end{array}$$

$$\begin{array}{r} 6 \\ +0 \\ \hline \end{array}$$

$$\begin{array}{r} 3 \\ +7 \\ \hline \end{array}$$

$$\begin{array}{r} 7 \\ +0 \\ \hline \end{array}$$

$$\begin{array}{r} 8 \\ +9 \\ \hline \end{array}$$

$$\begin{array}{r} 8 \\ +3 \\ \hline \end{array}$$

$$\begin{array}{r} 3 \\ +1 \\ \hline \end{array}$$

$$\begin{array}{r} 1 \\ +8 \\ \hline \end{array}$$

$$\begin{array}{r} 2 \\ +0 \\ \hline \end{array}$$

$$\begin{array}{r} 6 \\ +9 \\ \hline \end{array}$$

$$\begin{array}{r} 7 \\ +6 \\ \hline \end{array}$$

$$\begin{array}{r} 3 \\ +3 \\ \hline \end{array}$$

$$\begin{array}{r} 4 \\ +4 \\ \hline \end{array}$$

$$\begin{array}{r} 8 \\ +6 \\ \hline \end{array}$$

$$\begin{array}{r} 5 \\ +6 \\ \hline \end{array}$$

$$\begin{array}{r} 0 \\ +6 \\ \hline \end{array}$$

$$\begin{array}{r} 4 \\ +1 \\ \hline \end{array}$$

$$\begin{array}{r} 3 \\ +6 \\ \hline \end{array}$$

$$\begin{array}{r} 1 \\ +3 \\ \hline \end{array}$$

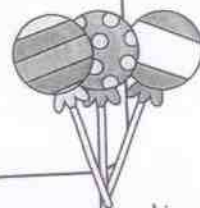
FRIDAY

Solve the story
problem.

Chris had 12 suckers. He gave 7 suckers to his friends.
Then his dad gave him 4 more suckers. How many suckers
does Chris have now?

Show your work here:

Answer: _____



Berry Creative ©

MONDAY

Read a book
and answer the
questions.

Who were the main characters in the book?

Where did the story take place?

What was your favorite part of the book?

TUESDAY

Sort the words
into the correct
column.

tree talk
dog shoes
run
play throw
crab
Aunt Sally
ride

Nouns

Verbs

Wednesday

Complete the sentence with a word from the box.

1. Tilly has a cast on her _____ hand.
2. _____ you bring me a drink, please?
3. _____ are you leaving for work?
4. The story was _____ a cat and dog.
5. My _____ friend is spending the night.

about could right when best

Thursday

Add the money and write the total on the line.



=

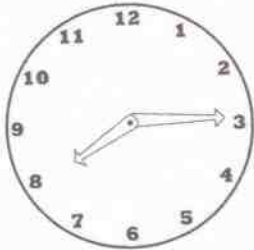


=

Friday

Read each question and fill in the correct time.

This is what time Sally goes to school each morning. Write the time in digital form and circle a.m. or p.m.



_____	:	_____	a.m.
_____	:	_____	p.m.

This is what time Sally gets off the bus after school. Write the time in digital form and circle a.m. or p.m.



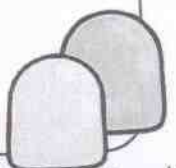
_____	:	_____	a.m.
_____	:	_____	p.m.

Monday Solve the story problem.

Chad had 25 gumdrops. He shared the gumdrops with 15 friends. How many gumdrops does Chad have left?

Show your work here:

Answer: _____



TUESDAY

Read the sentences and make the noun possessive to complete each sentence.

1. _____ dog ran away last night.
(Joey)

2. The _____ bat was missing from his bag.
(player)

3. The basketball _____ coach is Mr. Smith.
(team)

4. We always take the _____ bus to games.
(school)

5. _____ parents are always nice.
(Emily)

WEDNESDAY

Write 2 words that have the same vowel pattern.

pain

1. _____

2. _____

sleep

1. _____

2. _____

beat


1. _____

2. _____

pie

1. _____

2. _____



My Summer Vacation

Write a story
about your
summer
vacation!



By:

